

**DAV NCL PUBLIC SCHOOL BLOCK- B AREA, GORBI**  
**SAMPLE PAPER ANNUAL, SESSION – 2024-25**  
**Class -4,Subject-English**

**Maximum marks: 50**

**Time Allowed: 2 hours**

**General Instructions:**

1. This question paper consists of five sections: A, B, C, D & E.
2. Attempt all the questions. Internal choice is provided wherever it is necessary.
3. Read the questions carefully and follow the instruction

**SECTION-A (READING) (12 MARKS)**

**SECTION-B (WRITING) (08 MARKS)**

**SECTION-C (GRAMMAR) (10 MARKS)**

**SECTION-D (LITERATURE) (20 MARKS)**

**SECTION-E (BONUS READING)(4 MARKS)**

**SECTION-A (READING)**

**1. Read the questions carefully and tick the correct options.**

1. Who was Rizzi?

- (i) a hero      (ii) a thief      (iii) An alien

2. In the story 'King Thrushbeard' who was the most handsome man in the party?

- (i) Lemuel Gulliver      (ii) Birbal      (iii) King Thrushbeard

3. What did Akbar asked Birbal to do ?

- (i) to find three most foolish men in Agra      (ii) to find five most foolish men in Jaipur.  
(iii) to find five wisest men in Agra.

**2. Fill in the blanks.**

(i) Rizzi has eaten the cake because he was \_\_\_\_\_.

(iii) In the poem 'Curious Town' the kitten \_\_\_\_\_.

(iv) According to Birbal, the last two most foolish men in Agra were \_\_\_\_\_

And \_\_\_\_\_.

**3. Write 'T' for true ' F' for false for the following statements.**

(i) The Princess was happy to go with her husband. \_\_\_\_\_

(ii) Rizi helps the boy in baking a new cake. \_\_\_\_\_

(iii) Gulliver's ship is caught in a storm. \_\_\_\_\_

**OR**

iv)The Princess realised her mistake and asked for forgiveness \_\_\_\_\_

**4. Write the opposite meaning of the following words.**

(i)Happy \_\_\_\_\_

(ii)Friend \_\_\_\_\_

(iii)weak \_\_\_\_\_

**OR**

iv)Foolish \_\_\_\_\_

#### **SECTION-B (WRITING)**

**5. Write an application to the principal requesting him to grant you leave for 2 days sick leave. (04)**

**6. Write a paragraph in about 60-70 words on the topic 'Durga Puja'. (04)**

**Or**

**Imagine you have lost your pencil box .prepare a notice to be put up on the notice board.**

#### **SECTION-C (GRAMMAR)**

**7.Circle the Adverbs in the given sentences. (1×10=10)**

(i) The old lady climbed the staircase slowly.

(ii)The child watched the cartoon film happily.

**8. Underline the verbs in the given sentences.**

(i) Ashima is listening to music.

(ii)Shiela is reading the newspaper.

**9.Circle the subject in the given sentences.**

(i) My father usually answers them.

(ii) Rahul was ashamed of himself.

**10. Complete the following sentences.**

(i) If water is heated to 100°C, \_\_\_\_\_.

(ii) If ice is kept at normal temperature, \_\_\_\_\_.

**11. Fill the correct helping verbs in the given blanks.**

(i) Isha \_\_\_\_\_ (was/were) reading a book.

(ii) Rohit and Mayank \_\_\_\_\_ (are/is) playing cards.

**12. Look at the words given below. Rearrange them to form meaningful sentences.**

(i) making / Sheela / card / a beautiful / is

(ii) are / the boys / playing / football

**13. Complete the following sentences to make them interesting.**

(i) Our teacher will be angry if \_\_\_\_\_.

(ii) I would jump with joy if \_\_\_\_\_.

**14. Supply a suitable word/phrase in each blank given below to make meaningful sentences.**

(i) My bicycle \_\_\_\_\_.

(ii) \_\_\_\_\_ is a big city.

**OR**

iii) Students \_\_\_\_\_.

**15. Read the sentences carefully and fill the correct verbs in given below.**

(i) Maggie is \_\_\_\_\_ (reading/reads) a book.

(ii) Anil is \_\_\_\_\_ (putting/put) up a poster.

**OR**

iii) The ball \_\_\_\_\_ (was/were) bouncing.

**16. Fill the suitable adverbs in the given space.**

(i) My brother shouted \_\_\_\_\_

(ii)She watches television \_\_\_\_\_

**OR**

iii)The old man walked \_\_\_\_\_

**SECTION-D (LITERATURE)**

**17.Read the passage below – (3×1=3)**

The Lion family also came out of their cave. It was a small family the lion ,the lioness and their two lovely cubs .The Lion climbed on to a rock. He looked around and gave a loud roar. The cubs began to play with each other .The Lioness watched them,frolicking for some time then she called them.

**Answer the following questions-**

1)Where did the lion family live?

2)Where did the lion climb?

3)What did the Cubs do?

**OR**

4)what did the lioness do?

**18.Read the following extract and answer the following questions that follow.**

**‘Whose city is this?’ asked the princess. (3×1=3)**

**‘It is King Thrushbeard ‘s. It might have been yours,’ said the beggar.**

a)Which city is being referred to here?

b)How could the city have been the princess’s city?

c)Who is the beggar?

**OR**

d)why did King Thrushbeard turn himself into a beggar?

**19. ‘In a fit of anger the king gave princess to a beggar as his wife.’ Do you think the king made the correct decision of giving away his daughter to a beggar? why /why not? (4×1=4)**

**OR**

What prompted Bubble to come and check his cake in the kitchen

**20. Answer the following questions. (2×5=10)**

- a) what is the third man looking for?
- b) why did the lilliputians tie up Gulliver?
- c) why did Rizi eat the cake?
- d) what did the king do to the princess in a fit of anger?
- e) who was responsible for princess's sad state?
- f) why did Birbal call Akbar and himself foolish?
- g) Why was he (Bubble) shocked?

**OR**

h) How did Gulliver become a national Hero?

**SECTION-E: BONUS READING SECTION**

**(4 MARKS)**

- Q.1** who is the author of "Swami and friends"?
- Q2. who is Rajam?
- Q3. Who is the main storyteller in the Arabian Nights?
- Q4. What magical object does Aladdin find in a cave?

**OR**

**Q.5** What is Swami's full name?

---

×

**DAV NCL PUBLIC SCHOOL BLOCK- B AREA, GORBI**  
**SAMPLE ANNUAL PAPER, SESSION – 2024-25**

**CLASS- IV**  
**SUBJECT – MATHS**

**M.M: 50**  
**TIME- 2: H**

**General Instructions: -**

- 1. This question paper consists of Four sections.**
- 2. Attempt all questions.**
- 3. Read each questions carefully and follow the instructions.**

**SECTION - A (1X8=8)**

**Choose the correct option:(v)**

- 1.) Which of the following is a proper fraction?**

a)  $\frac{17}{15}$  b)  $\frac{15}{14}$  c)  $\frac{7}{9}$  d)  $\frac{18}{17}$

**Or**

Volume of a cube of edge 2m is?

a) 2m b) 6 m c) 8 sq. m d) 8 cu. m

- 2.) Fraction whose numerator is less than the denominator is called \_\_\_\_\_ fraction.**

a) unit b) proper c) improper d) mixed

- 3.) There are \_\_\_\_\_ right angle in a straight angle.**

a) 3 b) 2 c) 1 d) 4

**Fill in the blank**

**4.)** Volume of a cube = Edge x \_\_\_\_\_ x \_\_\_\_\_

**5.)** Missing numerator in  $\frac{2}{11} = \frac{\text{---}}{66}$

**Write True/false for the following statement:**

**6.)** A tennis ball and basketball have the same volume. \_\_\_\_\_

**7.)** An empty chalk box has less volume than a chalk box of same and shape full of chalk. \_\_\_\_\_

**OR**

Following pair of fraction are equivalent:  $\frac{6}{12} = \frac{12}{24}$

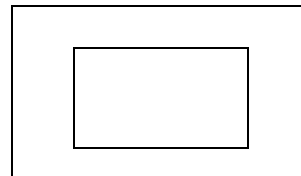
**Answer the following statement:**

**8.)** Solve the following:  $\frac{8}{13} + \frac{13}{13}$

**Case study:**

**I.** A floor is 5 m long and 6 m wide. A square carpet of sides 4 m is laid on the floor. Tick

The Correct option (✓)(1X3=3)



- 9. Find the rectangular floor area?**

a) 25m<sup>2</sup> b) 30m<sup>2</sup> c) 15m<sup>2</sup> d) 10m<sup>2</sup>

- 10. Find the area square of carpet?**

a) 10m<sup>2</sup> b) 16m<sup>2</sup> c) 9m<sup>2</sup> d) 15m<sup>2</sup>

11. Find the area of floor that is not carpeted?

- a)  $14 \text{ m}^2$                       b)  $11 \text{ m}^2$                       c)  $10 \text{ m}^2$                       d)  $8 \text{ m}^2$

Or

Perimeter of side?

**II. Case studyTypeQuestion:(1X3=3)**

The length, breadth and height of a cuboidal water tank are 10 m, 12 m and 5 m  
Respectively. If half of the tank is filled with water?

12. Find theVolume of water tank?

- a) 600 cu. m                      b) 720 cu. m                      c) 600 m                      d) 720 m

13. Find theVolume of half of the water tank?

- a) 300 cu. m                      b) 600 cu. m                      c) 300 m                      d) 600 m

14. Volume of cube?

- a) Edge X Edge X Edge                      b) length X breadth X height  
c) Length X breadth                      d) side X side

Or

The best unit to measure volume is

- a) Sphere                      b) cuboid                      c) cube                      d) square

**SECTION B (2X4=8)**

**Short answer type question:**

15. Complete the following pattern

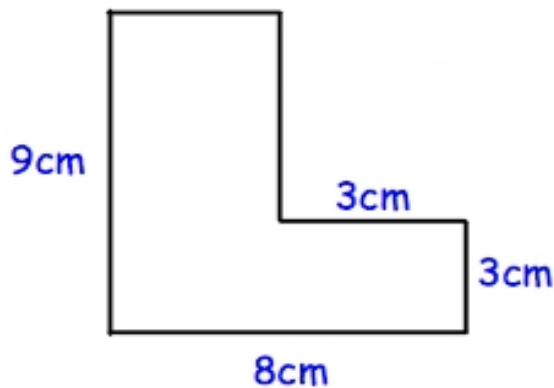
12, 14, 16, \_\_, \_\_,

16. Define an obtuse angle?

Or

Define an straight angle?

17. Find the perimeter of the following figure:



18.What is a unit Fraction? Give an example

**SECTION C (3x4=12)**

**Short answer type questions**

19. Guddu has 200cm of lace. She wants to stitch it around the border of a square sized cloth.If each side of the cloth measures 45cm, find the length of lace left with her.

Or

Perimeter of a triangle is 20 cm. if length of one side is 8cm, the sum of other two side

Will be?

20. Draw an angle using your protector:  $90^\circ$ ,  $120^\circ$ ,  $80^\circ$   
21. A dice has edge of 6 cm. Find the volume of the dice?  
22. Write the next three equivalent fraction:  $\frac{8}{10}$ , ---, ----, ----

Or

Which of the following can be written as mixed number:  $\frac{15}{10}$

**SECTION D (4X4=16)**

**Long answer type question**

23. Raju walked 2 times around a square Park with each side 25m. Find the distance Covered by her?

Or

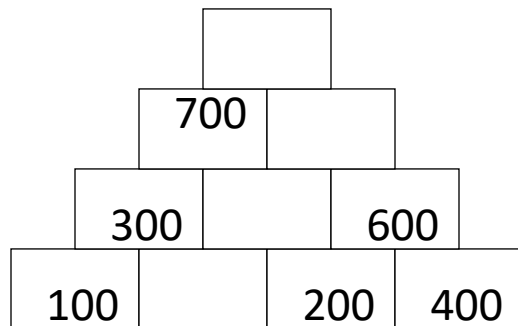
Sonu ran around a rectangular garden of length 15 meter and breadth 10 meter. Rita Ran around a square field of side 15 meters. Who covered more distance and by how Much?

24. The length of a cuboid is 20 cm, breadth is 10 cm, and height is 2 cm less than breadth. Its Volume will be?

Or

The edge of cubical box is 10 cm. half of the box is filled with sand. what is the volume of sand?

25. By using addition rule complete the pyramid?



**26. Match the following**

**Coloumn A**

- i. A line segment has
- ii. A Ray has
- iii. A line has
- iv. A line segment can be

**Coloumn B**

- one end point
- no end point
- measured
- two end point

Or

Construct the following line segments:

- a) AB = 5 cm
- b) CD = 3 cm
- c) EF = 9 cm
- d) GH = 12 cm

\*\*\*\*\*





**DAV PUBLIC SCHOOLS, MP ZONE – D**  
**SAMPLE PAPER**  
**Session 2024-25**  
**Class – IV Subject – Social Science**

**Maximum Marks – 50**

**Time Allowed – 2 Hours**

**GENERAL INSTRUCTIONS:**

- \* The question paper comprises of **five** sections – **A, B, C, D,** and **E.** There are **22** questions in the paper. All questions are compulsory.
- \* **Section A** – Question number 1 to 8 are very short answer type question of **1 mark** each.
- \* **Section B** - Question number 9 to 10 are case study based questions carrying **3 marks** each.
- \* **Section C** - Question number 11 to 14 are short answer type question of **2 marks** each.
- \* **Section D**- Question number 15 to 17 are short answer type question of **3 marks** each.
- \* **Section E** - Question number 18 to 21 are long answer type question of **4 marks** each and Q. No. 22 is Map work of 3 Marks.
- \* There is no overall choice in the question paper. However, an internal choice has been provided in few questions. Only one of the choices in such questions has to be attempted.

**SECTION -A**

**I. Fill in the blanks.**

**(4 Marks)**

1. There are \_\_\_\_\_ cardinal directions.
2. It is important to learn the \_\_\_\_\_ of a map.
3. Sports were popular even in \_\_\_\_\_ times
4. \_\_\_\_\_ is famous for organising tennis matches.

**OR**

Credit cards are known as \_\_\_\_\_ money.

**II. Match the following:**

**(4 Marks)**

- |                   |                                       |
|-------------------|---------------------------------------|
| 5. Vaishno Devi   | a. man's best friend                  |
| 6. Kathakali      | b. first newspaper published in India |
| 7. Books          | c. dance form                         |
| 8. Bengal Gazette | d. pilgrimage tourism                 |

## SECTION -B

### III. Case study

(3×2 = 6 Marks)

9. Lakshadweep islands are in the Arabian Sea in the south – west of India. They are close to the mainland. They are small and flat. They are only 36 in number. Only 10 islands are big enough for people to live on them and earn their living.

**Answer the following questions according to the given case study.**

i) In which direction of India, Lakshadweep islands are located?

ii) Write the shape of the islands.

iii) How many islands make Lakshadweep islands?

10. India is famous for temples, churches, mosques, gurudwaras, monasteries, etc. Thousands of pilgrims visit the Vaishno Devi temple, Golden Temple, Ajmer Sharif, Hemis Monastery, St. Cathedral, etc. The tourist can use a variety of means of transport like car, jeep, bus, etc. It is important to make a booking for a comfortable travel.

**Answer the following questions according to the given case study.**

i) Name any one means of transport.

ii) Why is it important to make a booking?

iii) Write any one tourist place where pilgrims visit.

## SECTION – C

### IV. Answer the following questions in one word / sentence.

(4×2= 8 Marks)

11. Name two holy places located in Northern Plains.

12. Name two factors that help us to select the mode of transport.

13. What is a book of maps called?

14. Draw a road sign that shows – No Horn.

**OR**

Mention the names of any two traditional games of India.

## SECTION -D

### V. Answer the following questions in brief.

(3× 3= 9 Marks)

15. Mention three advantages of print media.

16. Why is a bullock called a farmer's friend?

17. What is the difference between a map and a sketch?

**OR**

How are outdoor games better than indoor games?

**SECTION – E**

**VI. Answer the following questions in detail.**

**(4×4= 16 Marks)**

**18.** What makes India a unique country?

**19.** Why is it important to limit television time of children? Give two arguments in favour of your answer.

**20.** What steps are taken to reduce traffic jams in cities?

**21.** How is adventure tourism different from pilgrimage tourism?

**OR**

How will you find different directions if you do not have a compass?

**VII. MAP WORK.**

**( 3 Marks)**

**22. Locate these places in the given map of India.**

**i)** Kerala

**ii)** One eastern state

**iii)** One Western state

\*\*\*\*\*

**D.A.V. NCL PUBLIC SCHOOL BLOCK-B, AREA GORBI**  
**SAMPLE PAPER TERM-II EXAMINATION**  
**SESSION 2024-2025**

**Class: IV**  
**Subject: Hindi**

**Maximum Marks: 50**  
**Time: 2 Hours**

- इस प्रश्न-पत्र में दो खंड हैं - 'अ' और 'ब'।
- प्रश्नों की संख्या 19 हैं।
- उत्तर-पुस्तिका में उत्तर के साथ वही क्रम-संख्या लिखिए जो प्रश्न-पत्र में है।

**खंड - 'अ'**

**1. प्रस्तुत गद्यांश को पढ़कर पूछे गए प्रश्नों के उत्तर लिखिए:-**

हिमाचल प्रदेश उत्तर भारत का बहुत सुंदर और खुशहाल राज्य है जहाँ प्रकृति की सुंदरता चारों ओर फैली हुई है। हिमाचल के वन यहाँ के निवासियों के जीवन का आधार हैं। हिमाचलवासी वनों से खाने-पीने की सामग्री, जड़ी-बूटियाँ और लकड़ियाँ प्राप्त करते हैं। पशुओं के लिए भोजन भी यहीं से प्राप्त हो जाता है। इन्हीं वनों पर उनकी खेती भी निर्भर करती है। वन वर्षा लाने में मदद करते हैं जिससे पथरीली भूमि में नमी रहती है। हिमाचल के सभी लोगों का पहला काम है कि कोई भी व्यक्ति इन वनों का अनुचित कटाव न करने पाए। हिमाचल के वन यहाँ के लोगों की जीवन रेखा है। यहाँ के लोग प्राणों से भी बढ़कर वनों की सुरक्षा को महत्त्व देते हैं।

- (क) हिमाचल प्रदेश कैसा राज्य है? (2)
- (ख) हिमाचलवासी वनों से क्या-क्या प्राप्त करते हैं? (2)
- (ग) हिमाचल के सभी लोगों का पहला काम क्या है? (2)
- (घ) वन किस कार्य में मदद करते हैं? (2)
- (ङ) हिमाचल के लोग वनों की सुरक्षा को महत्त्व क्यों देते हैं? (2)

**2. निम्नलिखित शब्दों के उचित संबंध वाले विकल्प छाँटकर लिखिए:- (1×2=2)**

- (क) पर्व : विशेष दिन :: सर्वाधिक : ?
- (i) सबसे अधिक (ii) सबसे कम (iii) ऊपर (iv) ज़्यादा
- (ख) मालदार : दार :: चित्रित : ?
- (i) इत (ii) त (iii) त्रित (iv) दारी

3. निम्नलिखित प्रश्नों के उचित विकल्प चुनकर लिखिए:-

(1×2=2)

(क) 'अकल' का समान अर्थ है-

- (i) अकेला (ii) अलग (iii) भरोसा (iv) बुद्धि

(ख) 'उदय' शब्द का विलोम शब्द है -

- (i) उगना (ii) अस्त (iii) उठना (iv) सूरज

4. निम्नलिखित कथनों को पढ़कर सही विकल्प छाँटकर लिखिए:-

(1×2=2)

(क) कथन : 'अध्यापिका' स्त्रीलिंग शब्द है।

कारण : पुरुष जाति का बोध कराने वाले शब्दों को स्त्रीलिंग कहते हैं।

(i) कथन और कारण दोनों सही हैं, क्योंकि कारण कथन की सही व्याख्या करता है।

(ii) कथन और कारण दोनों सही हैं, परंतु कारण कथन की सही व्याख्या नहीं करता है।

(iii) कथन सही है, परंतु कारण ग़लत है।

(iv) कथन ग़लत है, परंतु कारण सही है।

(ख) कथन : 'बादल गरज रहे हैं।' वाक्य वर्तमान काल का उदाहरण है।

कारण : जिस वाक्य से काम हो रहा है का बोध होता है उसे वर्तमान काल कहते हैं।

(i) कथन और कारण दोनों सही हैं, क्योंकि कारण कथन की सही व्याख्या करता है।

(ii) कथन और कारण दोनों सही हैं, परंतु कारण कथन की सही व्याख्या नहीं करता है।

(iii) कथन सही है, परंतु कारण ग़लत है।

(iv) कथन ग़लत है, परंतु कारण सही है।

5. निम्नलिखित प्रश्नों को पढ़कर सही विकल्प छाँटकर लिखिए:-

(1×2=2)

(क) 'रेफ़' के प्रयोग वाला सही शब्द है-

- (i) प्रहार (ii) रथ (iii) मूर्ख (iv) ड्रम

(ख) प्रस्तुत विराम चिह्न का सही नाम चुनकर लिखिए -

- (i) प्रश्न सूचक चिह्न (ii) पूर्ण विराम  
(iii) अल्प विराम (iv) योजक चिह्न

,
---

6. निम्नलिखित वाक्यों को सही शब्द चुनकर पूरा कीजिए:- (1×2=2)

(क) 'आमों में मिश्री घोली' वाक्य में क्रिया शब्द \_\_\_\_\_ है। (घोली / मिश्री)

(ख) 'होश' शब्द का समान लय वाला शब्द \_\_\_\_\_ है। ( देश / जोश)

7. निम्नलिखित कथनों को पढ़कर 'सही' या 'ग़लत' लिखिए:- (1×2=2)

(क) 'खटिया पकड़ना' मुहावरे का अर्थ खुश होना है।

(ख) 'महल में' का बहुवचन रूप महलों में है।


8. निम्नलिखित वाक्यों में उचित स्थान पर विराम चिह्न लगाकर वाक्यों को दोबारा लिखिए:- (1×2=2)

(क) तुम क्या पढ़ रहे हो


(ख) बच्चे चुपचाप बैठे हैं

9. निम्नलिखित चित्रों के आधार पर सही विकल्प छाँटकर लिखिए :- (1×2=2)

(क) प्रस्तुत चित्र के लिए दो पर्यायवाची शब्द लिखिए।



(ख) प्रस्तुत चित्र के लिए एक विशेषण शब्द लिखिए।



10. स्तंभ 'क' में दिए गए शब्दों को स्तंभ 'ख' में दिए गए उचित शब्दों से (1×4=4) मिलाकर लिखिए:-

स्तंभ 'क'	स्तंभ 'ख'
(क) विष	(i) डरपोक
(ख) आँख	(ii) हैरान
(ग) कायर	(iii) नेत्र
(घ) आश्चर्यचकित	(iv) अमृत

11. प्रस्तुत गद्यांश को पढ़कर पूछे गए प्रश्नों के उचित विकल्प चुनकर (1×5=5)

लिखिए:-

यह रंग है - मस्ती और उल्लास का रंग। वास्तव में बसंत का मौसम लोगों में नया जीवन, नई उमंग भर देता है। यही उल्लास हमारे रोजमर्रा के जीवन में विभिन्न पर्वों से झलकता है। हमारे देश के एक बड़े भाग में होली को ऐसे ही एक पर्व के रूप में मनाया जाता है। विभिन्न जनजातियों और समाजों में बसंत के मौसम में ऐसे कई पर्व मनाए जाते हैं, जो ऊपर से हमें होली जैसे ही लगते हैं लेकिन यह ज़रूरी नहीं है कि वे होली ही हों। जिसे हम होली के रूप में मनाते हैं वह मुख्य रूप से उत्तर भारत का पर्व है। दक्षिण में यह पर्व या तो मनाया ही नहीं जाता या फिर इसका स्वरूप अलग तरह का होता है।

(क) होली का रंग किसका रंग है?

- |                     |             |
|---------------------|-------------|
| (i) मस्ती और उल्लास | (ii) दुख    |
| (iii) शांति         | (iv) असफलता |

(ख) होली का त्योहार किस रूप में मनाया जाता है?

- |               |           |
|---------------|-----------|
| (i) चित्रकारी | (ii) बसंत |
| (iii) मौसम    | (iv) पर्व |

(ग) होली का त्योहार मुख्य रूप से कहाँ का पर्व है?

- |                  |                  |
|------------------|------------------|
| (i) उत्तर भारत   | (ii) दक्षिण भारत |
| (iii) पूर्व भारत | (iv) पश्चिम भारत |

(घ) बसंत का मौसम लोगों में क्या भर देता है?

- |                         |             |
|-------------------------|-------------|
| (i) आलस                 | (ii) उदासी  |
| (iii) नया जीवन, नई उमंग | (iv) पागलपन |

(ङ) प्रस्तुत गद्यांश किस पाठ से लिया गया है?

- |                       |                          |
|-----------------------|--------------------------|
| (i) होली के रंग हज़ार | (ii) एक थी स्वाति        |
| (iii) ऐसे भी बच्चे    | (iv) एक बौना और लकड़हारा |

12. निम्नलिखित प्रश्नों के सही विकल्प चुनकर लिखिए:-

(1×5=5)

(क) चित्रकार किसकी तरह खिसक कर भागा?

(i) बंदर

(ii) शेर

(iii) चोर

(iv) गिलहरी

(ख) नाव कहाँ लगी हुई थी?

(i) झील के किनारे

(ii) तालाब के किनारे

(iii) नदी के किनारे

(iv) नदी के बीच

(ग) कोयल ने आमों में मिश्री कैसे घोली?

(i) कूक-कूककर

(ii) चिल्लाकर

(iii) उड़कर

(iv) काँव-काँव करके

(घ) कोयल किसकी बात हमेशा मानती है?

(i) चिड़ियों की

(ii) दादी की

(iii) माँ की

(iv) नानी की

(ङ) चिड़ियों की रानी कौन कहलाती है?

(i) कोयल

(ii) तोता

(iii) मैना

(iv) मोर

खंड -'ब'

13. निम्नलिखित प्रश्नों के उत्तर (15-20 शब्दों में) लिखिए:-

(2×3=6)

(क) कोयल का रंग कैसा होता है, और उसकी बोली की क्या विशेषता है?

(ख) पन्ना को कौन-सी चिंता सता रही थी?

(ग) हिरण्यकश्यप राजा क्या चाहता था?

14. निम्नलिखित प्रश्नों के उत्तर (20-25 शब्दों में) लिखिए:-

(3×2=6)

(क) मौसम कविता के आधार पर बताइए कि बादल किससे बनते हैं और

सूरज से हम क्या सीखते हैं?

(ख) स्वाति को पुरस्कार क्यों दिया गया?



15. निम्नलिखित प्रश्नों के उत्तर (35-40 शब्दों में) लिखिए:- (4×2=8)

(क) हीरा का स्कूल जाते हुए बच्चों को देखकर स्वयं का भी स्कूल जाने का सपना देखना क्या उचित था? 'ऐसे भी बच्चे' पाठ के आधार पर अपने विचार लिखिए?

(ख) आपको सबसे अच्छा मौसम कौन-सा लगता है और क्यों?

16. निम्नलिखित में से किसी एक विषय पर (60 शब्दों में) अनुच्छेद लिखिए:- (5×1=5)

(क) खेल-कूद का महत्त्व

(ख) मनोरंजन का साधन : कंप्यूटर

(ग) विद्यार्थी जीवन में अनुशासन का महत्त्व

17. निम्नलिखित में से किसी एक विषय पर पत्र (80 शब्दों में) लिखिए:- (5×1=5)

(क) आपकी दीदी की शादी में जाने के लिए तीन दिनों के अवकाश हेतु अपनी विद्यालय के प्राचार्य को प्रार्थना-पत्र लिखिए।

(ख) होली के त्योहार पर अपने मित्र को होली खेलने के लिए निमंत्रण देते हुए पत्र लिखिए।

18. जूडो-कराटे सीखने के महत्त्व पर दो मित्रों के बीच हुई बातचीत को संवाद (5×1=5) के रूप में (50 शब्दों में) लिखिए।

19. प्रस्तुत चित्र का वर्णन (60 शब्दों में) लिखिए:- (5×1=5)



\*\*\*\*\*

**DAV PUBLIC SCHOOLS, MP ZONE – D**

**SAMPLE PAPER**

**Session 2024-25**

**Class – IV Subject – Science**

**Maximum Marks – 50**

**Time Allowed – 2 Hours 30 minutes**

---

**GENERAL INSTRUCTIONS:**

- The question paper comprises of five sections – **A, B, C, D, and E**. There are **22** questions in the paper. All questions are compulsory.
  - **Section A** – Question number 1 to 8 are very short answer type question of 1 mark each.
  - **Section B** – Question number 9 to 10 are case study based questions carrying 3 marks each.
  - **Section C** – Question number 11 to 14 are short answer type question of 2 marks each.
  - **Section D**- Question number 15 to 18 are short answer type question of 3 marks each.
  - **Section E** – Question number 19 to 22 are long answer type question of 4 marks each.
  - There is no overall choice in the question paper. However, an internal choice has been provided in few questions. Only one of the choices in such questions has to be attempted.
- 

**SECTION -A**

**# FILL IN THE BLANKS.**

**(4 Marks)**

1. We can get \_\_\_\_\_ from iodised table salt.
2. Malaria is spread by the bite of female \_\_\_\_\_.
3. \_\_\_\_\_ removes dust from water.
4. Bees and \_\_\_\_\_ are stinging insects.

**OR**

\_\_\_\_\_ and \_\_\_\_\_ are sources of Vitamin C.

**# TICK (✓) THE CORRECT OPTION.**

**(4 Marks)**

5. Calcium, Iron and Phosphorus are examples of \_\_\_\_  
(a) minerals      (b) vitamins      (c) proteins      (d) carbohydrates
6. Honeybees make honey from \_\_\_\_  
(a) lac      (b) nectar      (c) milk      (d) sugar

7. By drinking unclean water, one may get a disease like \_\_\_\_

- (a) malaria      (b) dengue      (c) chikungunya      (d) jaundice

8. Our body requires, and uses water for \_\_\_\_

- (a) breathing      (b) digestion of food      (c) preparation of food      (d) transpiration

**OR**

A person doing a lot of physical work, needs more of \_\_\_\_

- (a) Vitamins      (b) minerals      (c) proteins      (d) carbohydrates

### **SECTION – B**

#### **# CASE STUDY**

9. Rainwater is the purest form of water. As it reaches the surface of the earth , it usually becomes impure. This is because it dissolves not only some harmful gases present in the air but also has dust , smoke particles and germs getting mixed in it.

**Answer the following questions according to the given case study. (3 Marks)**

- i) Rain water is the purest form of water. \_\_\_\_ ( true/ false)
- ii) At what stage, does the rain water become impure ?
- iii) Why does rainwater becomes impure?

**OR**

Rainwater dissolves \_\_\_\_\_ in it.

10. Roughage is the fibre present in the food. We get it mainly from fruits, vegetables, pulses and whole grains. Fibre does not provide any nutrient to our body. However, it helps our body to get rid of undigested food.

**Answer the following questions according to the given case study. (3 Marks)**

- i) What is roughage?
- ii) Name any one source of roughage.
- iii) Fibres doesn't provide any \_\_\_\_\_ to our body.

**OR**

Write any one function of roughage.

### **SECTION -C**

**# Answer the following questions in one word or sentence.**

**(4×2= 8 Marks)**

11. Name the diseases that get spread by houseflies.
12. How much of the surface of earth is covered by water ?
13. Name two sources of fresh water.
14. Which two pollutants are often dumped by the factories into the rivers?

**OR**

Name two methods of purification of water.

**SECTION – D**

**# Answer the following questions in brief.**

**(4×3= 12 Marks)**

15. What is pollination?
16. State the role of proteins for our body.
17. State one utility of dams.
18. How does boiling help in making water safer for drinking?

**OR**

Why should we not allow water to stagnate around our houses?

**SECTION – E**

**# Answer the following questions in detail.**

**(4×4= 16 Marks)**

19. How does setting up of factories affect the ground water level?
20. What is chlorination? How does it purify water?
21. Why should we eat a balanced diet?
22. State four effects of water pollution.

**OR**

State four ways of reducing water pollution.

\*\*\*\*\*

